




# Count and Write



Count the circles, Write the numbers. Find the sum.


 +  4 + 4 = 8

 +         +        =

 +         +        =

 +         +        =

 +         +        =

 +         +        =

# Count and Write

Count the circles, Write the numbers. Find the sum.



+



\_\_\_\_\_

+

\_\_\_\_\_

=



+



\_\_\_\_\_

+

\_\_\_\_\_

=



+



\_\_\_\_\_

+

\_\_\_\_\_

=



+



\_\_\_\_\_

+

\_\_\_\_\_

=



+



\_\_\_\_\_

+

\_\_\_\_\_

=



+



\_\_\_\_\_



+

\_\_\_\_\_

=


# Count and Write



Count the circles, Write the numbers. Find the sum.



 +  \_\_\_\_\_ + \_\_\_\_\_ =

 +  \_\_\_\_\_ + \_\_\_\_\_ =

 +  \_\_\_\_\_ + \_\_\_\_\_ =

 +  \_\_\_\_\_ + \_\_\_\_\_ =

 +  \_\_\_\_\_ + \_\_\_\_\_ =

 +  \_\_\_\_\_ + \_\_\_\_\_ =

# Count and Write

Count the circles, Write the numbers. Find the sum.



+



\_\_\_\_\_

+

\_\_\_\_\_

=



+



\_\_\_\_\_

+

\_\_\_\_\_

=



+




\_\_\_\_\_

+

\_\_\_\_\_

=



+



\_\_\_\_\_

+

\_\_\_\_\_

=



+



\_\_\_\_\_

+

\_\_\_\_\_

=



+



\_\_\_\_\_



+

\_\_\_\_\_



=

# Count and Write



Count the circles, Write the numbers. Find the sum.



 +  \_\_\_\_\_ + \_\_\_\_\_ =

 +  \_\_\_\_\_ + \_\_\_\_\_ =

 +  \_\_\_\_\_ + \_\_\_\_\_ =

 +  \_\_\_\_\_ + \_\_\_\_\_ =

 +  \_\_\_\_\_ + \_\_\_\_\_ =

 +  \_\_\_\_\_ + \_\_\_\_\_ =