

Addition

$2 + 5 = \square$

$2 + 8 = \square$

$3 + 0 = \square$

$6 + 2 = \square$

$5 + 4 = \square$

$4 + 4 = \square$

$9 + 1 = \square$

$2 + 1 = \square$

$7 + 2 = \square$

$4 + 0 = \square$

$6 + 4 = \square$

$1 + 9 = \square$

$2 + 2 = \square$

$2 + 7 = \square$

$5 + 6 = \square$

$9 + 0 = \square$

Addition

$4 + 0 = \square$

$3 + 1 = \square$

$0 + 9 = \square$

$5 + 0 = \square$

$9 + 0 = \square$

$3 + 8 = \square$

$1 + 0 = \square$

$2 + 5 = \square$

$2 + 9 = \square$

$4 + 6 = \square$

$4 + 1 = \square$

$8 + 3 = \square$

$9 + 1 = \square$


$3 + 0 = \square$

$2 + 4 = \square$


$5 + 5 = \square$

Count the fruits ,write the numbers. find the sum

$$7 + 1 =$$



$$5 + 3 =$$



$$3 + 2 =$$




Count the fruits ,write the numbers. find the sum

$$2 + 2 = \square$$



$$7 + 1 = \square$$




$$4 + 2 = \square$$





Count the fruits ,write the numbers. find the sum


$$7 + 3 = \square$$



$$5 + 1 = \square$$



$$2 + 2 = \square$$



Count and Write

Count the circles, Write the numbers. Find the sum.

$$\begin{array}{c} \bullet \\ \bullet \end{array} + \begin{array}{c} \bullet \\ \bullet \bullet \end{array} \underline{\quad 2 \quad} + \underline{\quad 3 \quad} = \boxed{5}$$

$$\begin{array}{c} \bullet \bullet \end{array} + \begin{array}{c} \bullet \bullet \end{array} \underline{\quad \quad} + \underline{\quad \quad} = \boxed{\quad}$$

$$\begin{array}{c} \bullet \\ \bullet \bullet \bullet \end{array} + \begin{array}{c} \bullet \\ \bullet \bullet \bullet \end{array} \underline{\quad \quad} + \underline{\quad \quad} = \boxed{\quad}$$



$$\begin{array}{c} \bullet \bullet \bullet \end{array} + \begin{array}{c} \bullet \bullet \end{array} \underline{\quad \quad} + \underline{\quad \quad} = \boxed{\quad}$$

$$\begin{array}{c} \bullet \bullet \end{array} + \begin{array}{c} \bullet \\ \bullet \bullet \bullet \end{array} \underline{\quad \quad} + \underline{\quad \quad} = \boxed{\quad}$$

$$\begin{array}{c} \bullet \bullet \end{array} + \begin{array}{c} \bullet \\ \bullet \bullet \end{array} \underline{\quad \quad} + \underline{\quad \quad} = \boxed{\quad}$$



Count and Write



Count the circles, Write the numbers. Find the sum.



 +  _____ + _____ =

 +  _____ + _____ =

 +  _____ + _____ =



 +  _____ + _____ =

 +  _____ + _____ =

 +  _____ + _____ =

Count and Write



Count the circles, Write the numbers. Find the sum.



 +  + =

 +  + =

 +  + =



 +  + =

 +  + =

 +  + =



Count and Write



Count the circles, Write the numbers. Find the sum.



 +  _____ + _____ =

 +  _____ + _____ =

 +  _____ + _____ =



 +  _____ + _____ =

 +  _____ + _____ =



 +  _____ + _____ =

Count and Write

Count the circles, Write the numbers. Find the sum.



 +  + =

 +  + =

 +  + =

 +  + =

 +  + =

 +  + =