

Subtraction Worksheet

Choose the answers from given bubbles and write them in the given boxes.

$5 - 3 = \square$

$7 - 4 = \square$

$9 - 7 = \square$

$5 - 1 = \square$

$6 - 1 = \square$

$2 - 1 = \square$

9

2

6


4

5

3

2

1



Subtraction Worksheet

Choose the answers from given bubbles and write them in the given boxes.

$5 - 4 = \square$

$7 - 3 = \square$

$9 - 6 = \square$

$5 - 2 = \square$

$6 - 2 = \square$

$2 - 0 = \square$

9

2

3


4

5

3

2

1



Subtraction Worksheet

Choose the answers from given bubbles and write them in the given boxes.

$5 - 5 = \square$

$7 - 2 = \square$

$9 - 5 = \square$

$5 - 2 = \square$

$6 - 3 = \square$

$2 - 2 = \square$

0

5

3


4

0

0

2

3



Subtraction Worksheet

Choose the answers from given bubbles and write them in the given boxes.

$4 - 1 = \square$

$6 - 1 = \square$

$6 - 5 = \square$

$5 - 2 = \square$

$6 - 4 = \square$

$7 - 1 = \square$

0

3

3


4

6

1

2

5



Subtraction Worksheet

Choose the answers from given bubbles and write them in the given boxes.

$4 - 3 = \square$

$6 - 2 = \square$

$6 - 6 = \square$

$5 - 1 = \square$

$6 - 5 = \square$

$7 - 5 = \square$

4

1

3

4

2

0

2

1

